


## Lesson 2

WALT divide by  
sharing into equal  
groups



*WALT divide by sharing into equal groups*

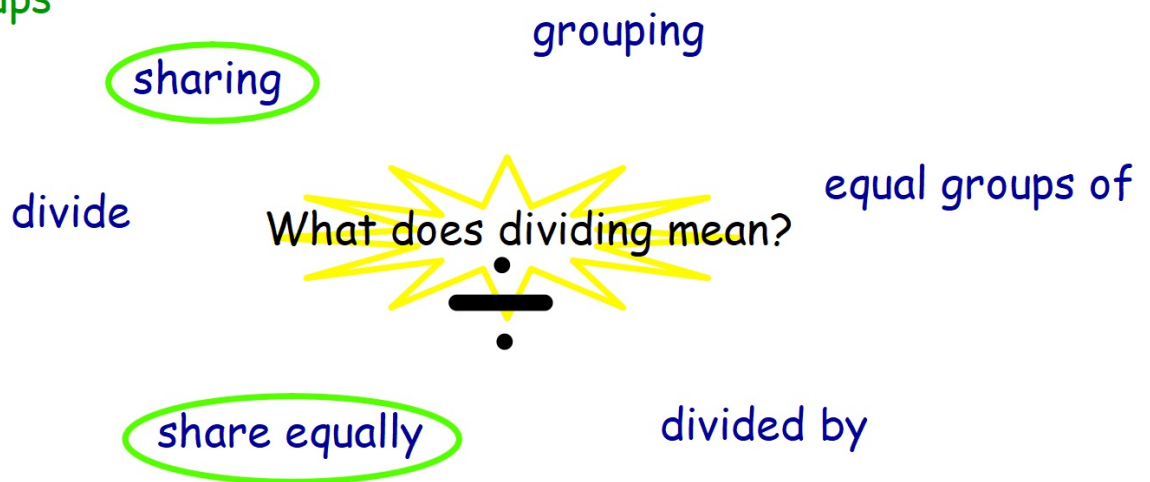
Can you complete this?



\_\_\_ shared equally into \_\_\_ is \_\_\_  
\_\_\_ ÷ \_\_\_ = \_\_\_

## WALT divide by sharing into equal groups

This week we will focus on  
sharing and sharing into  
equal groups



---

*WALT divide by sharing into equal groups*

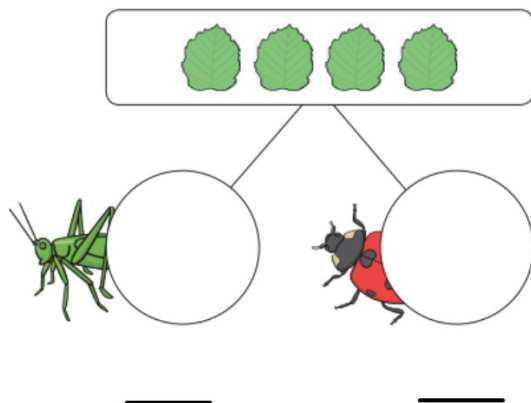
What does sharing equally means?



## WALT divide by sharing into equal groups

Can you share equally?

Draw in the leaves and write how many they each get.



\_\_\_\_ shared equally between 2 is \_\_\_\_  
\_\_\_\_ ÷ \_\_\_\_ = \_\_\_\_

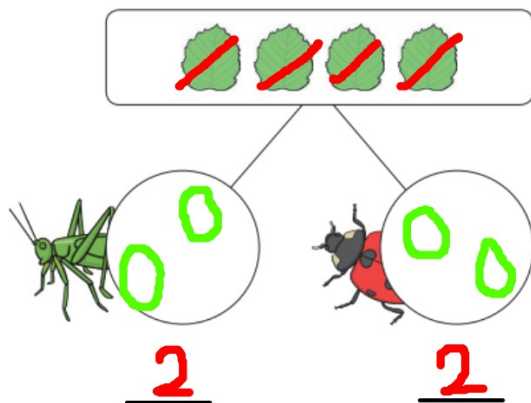
Top tip: cross out the leaves as you share them

## WALT divide by sharing into equal groups

Can you share equally?

Draw in the leaves and write how many they each get.

ANSWER



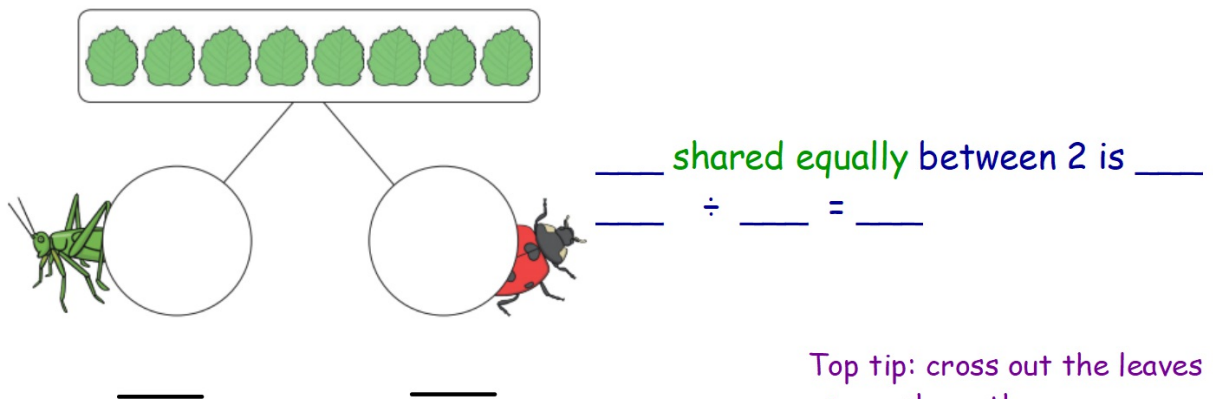
$$\begin{array}{r} 4 \\ 4 \end{array} \text{ shared equally between } 2 \text{ is } \underline{2}$$
$$\underline{4} \div \underline{2} = \underline{2}$$

Top tip: cross out the leaves as you share them

*WALT divide by sharing into equal groups*

Can you share equally?

Divide the leaves between the 2 insects.



\_\_\_ shared equally between 2 is \_\_\_

\_\_\_ ÷ \_\_\_ = \_\_\_

\_\_\_

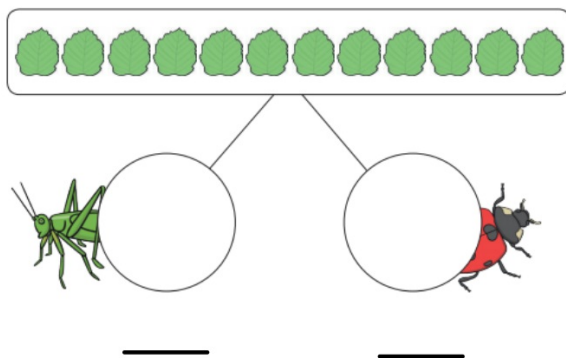
\_\_\_

Top tip: cross out the leaves as you share them

*WALT divide by sharing into equal groups*

Can you share equally?

Divide the leaves between the 2 insects.



\_\_\_ shared equally between 2 is \_\_\_  
\_\_\_ ÷ \_\_\_ = \_\_\_

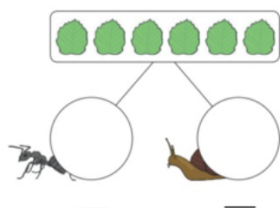
Top tip: cross out the leaves  
as you share them



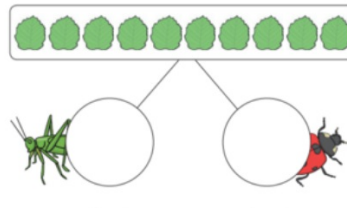
# WALT divide by sharing into equal groups

Now you have a go!

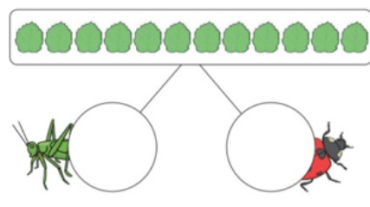
*WALT divide by sharing into equal groups*



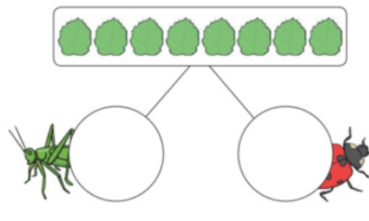
—                      —  
— shared equally between 2 is —  
— ÷ — = —



—                      —  
— shared equally between 2 is —  
— ÷ — = —



—                      —  
— ÷ — = —

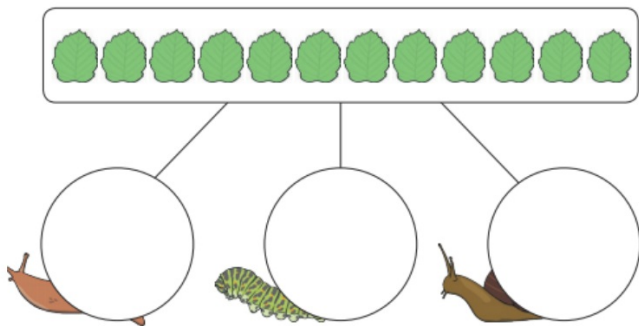


—                      —  
— ÷ — = —

*WALT divide by sharing into equal groups*

What do you notice?

How many groups are we sharing between?

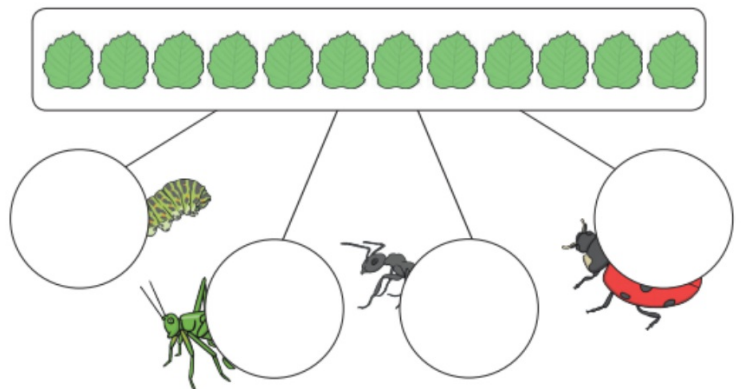


\_\_\_ shared equally between \_\_\_ is \_\_\_  
\_\_\_ ÷ \_\_\_ = \_\_\_

*WALT divide by sharing into equal groups*

How many groups are we sharing between?

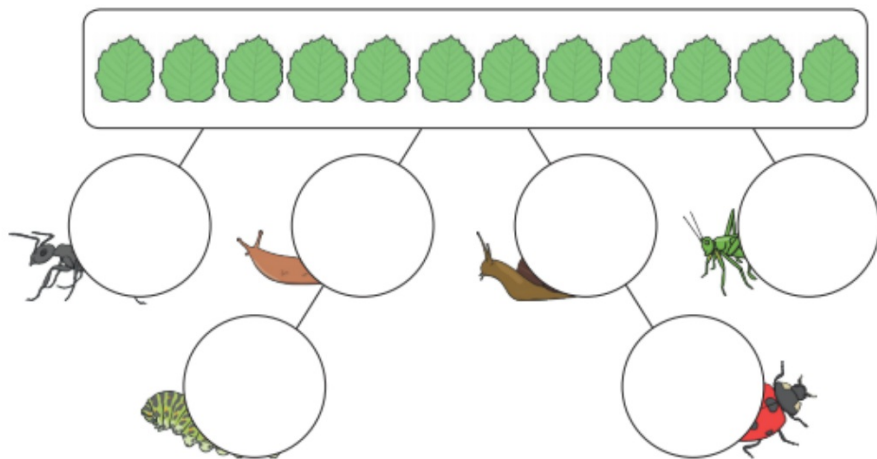
\_\_\_ shared equally between \_\_\_ is \_\_\_  
\_\_\_ ÷ \_\_\_ = \_\_\_



*WALT divide by sharing into equal groups*

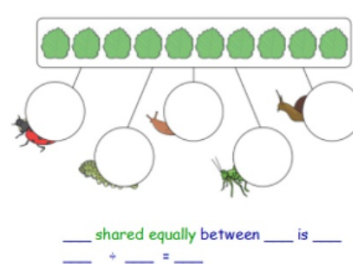
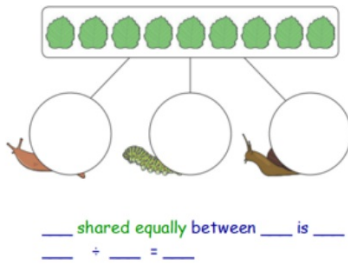
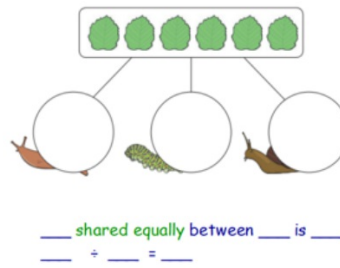
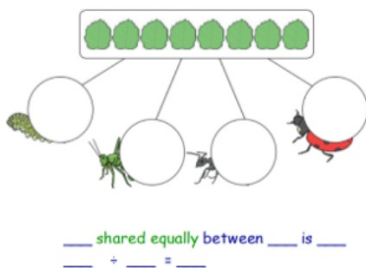
WOW!

\_\_\_ shared equally between \_\_\_ is \_\_\_  
\_\_\_ ÷ \_\_\_ = \_\_\_



*WALT divide by sharing into equal groups*

Now you have a go!



---

*WALT divide by sharing into equal groups*

Now you have a go!

