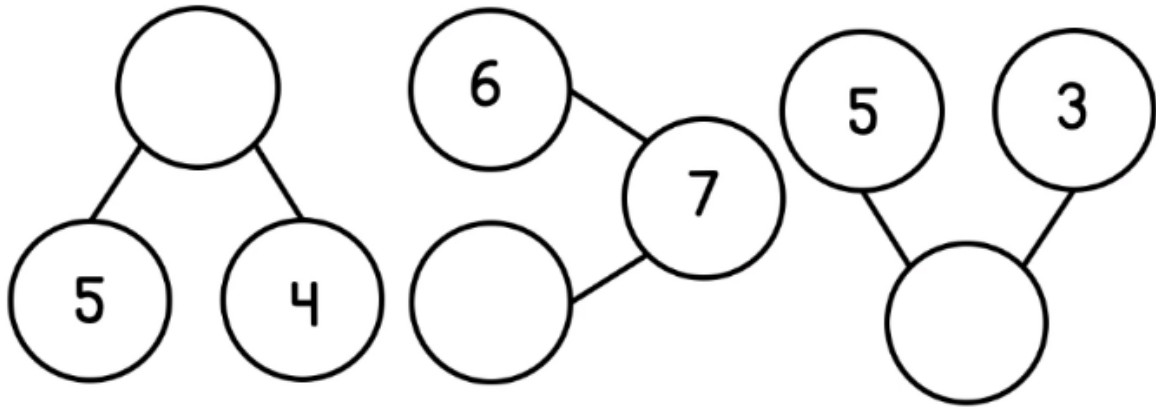


## Lesson 4

WALT find a part

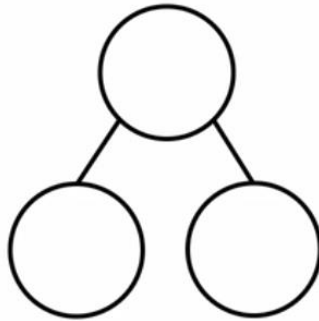


$$\square + \square = \square$$
$$\square = \square + \square$$

$$\square + \square = \square$$
$$\square = \square + \square$$

$$\square + \square = \square$$
$$\square = \square + \square$$

Miss Brown has 7 apples.  
3 apples are red and the  
rest are green.  
How many are green?



  is a **part**

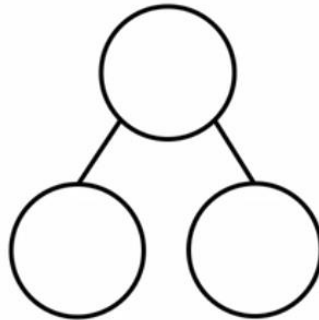
  is a **part**

The whole is  

$$\square + \square = \square$$

$$\square = \square + \square$$

There are 9 cars in the  
car park.  
6 are orange and the  
rest are blue.  
How many blue cars are  
there?



  is a **part**

  is a **part**

The whole is  

$$\square + \square = \square$$

$$\square = \square + \square$$