


WALT use the bar model for number bonds to 20

$$5 + 15 = 20$$



$$19 + 1 = 20$$



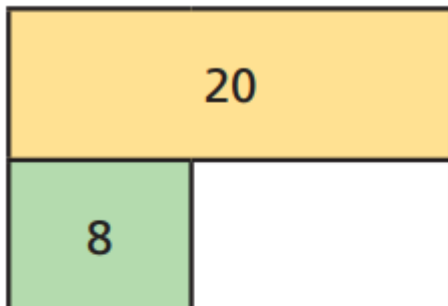
$$20 = 2 + 18$$



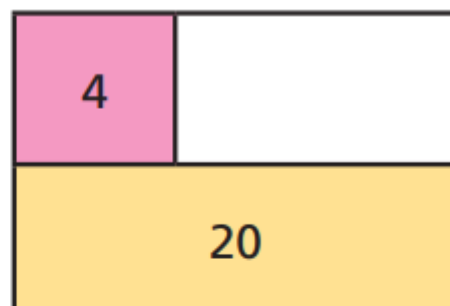
$$20 = 17 + 3$$




a)



c)



b)



d)

