

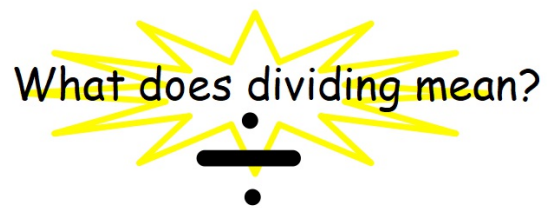
Lesson 1

WALT group objects

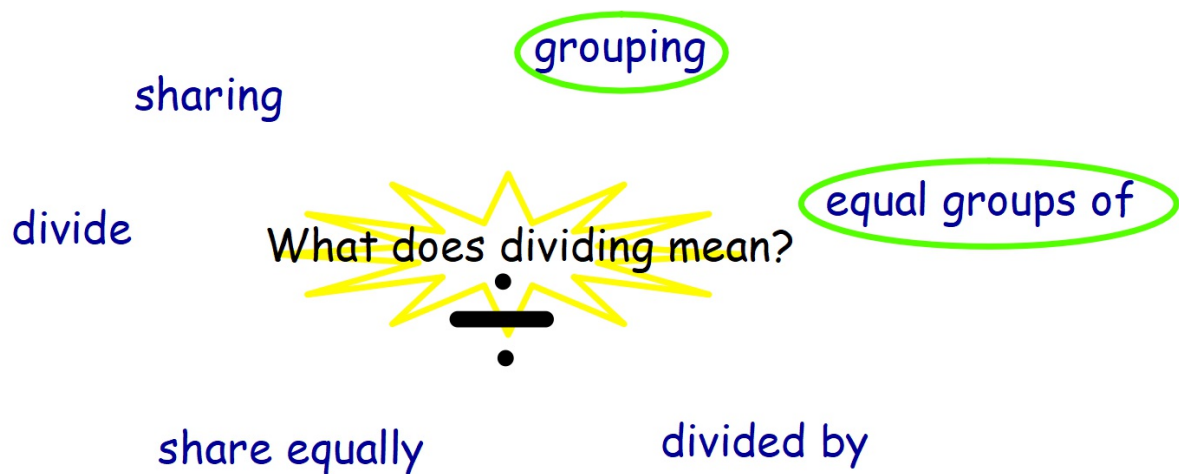


WALT group objects

Talk and share



WALT group objects




This week we will focus on grouping!

WALT group objects


Let's have a look at grouping and how to make groups

There are frogs.



WALT group objects



There are frogs.
Can you place these frogs into groups of 4?



First make one group of 4

WALT group objects

There are frogs.
Can you place these frogs into groups of 4?





Then another group

WALT group objects

There are frogs.
Can you place these frogs into groups of 4?

How many groups of 4 did you make?

There are ____ frogs in each group.

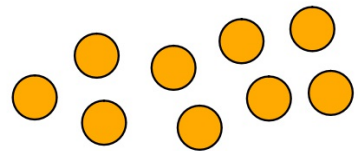


WALT group objects




You will need objects to help you group

Using your white board and lentils/pasta/lego, have a go at this?
We will check how you got on after.

Can you sort 9 objects into 3 groups?




There are ____ in each group.







WALT group objects

Using your white board and lentils/pasta/lego, have a go at this?
We will check how you got on after.

Can you sort 12 objects into 4 groups?



There are ____ in each group.

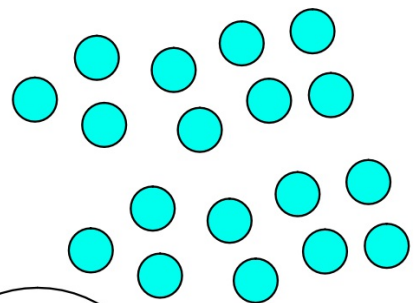





WALT group objects

Using your white board and lentils/pasta/lego, have a go at this?
We will check how you got on after.

Can you sort 18 objects into 3 groups?

There are ____ in each group.



WALT group objects

Now you have a go.

Use your whiteboard to draw circles for grouping and use your objects to group.

Can you sort 6 objects into 3 groups?

There are ____ in each group.

Can you sort 8 objects into 2 groups?

There are ____ in each group.

Can you sort 12 objects into 3 groups?

There are ____ in each group.

Can you sort 12 objects into 4 groups?

There are ____ in each group.

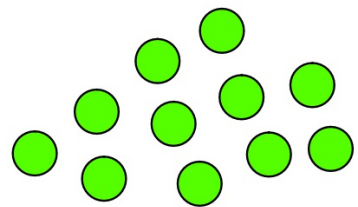
Can you sort 20 objects into 4 groups?

There are ____ in each group.

WALT group objects

What do you notice? Talk and share

Can you sort 11 objects into 4 groups?



There are ____ in each group.

