

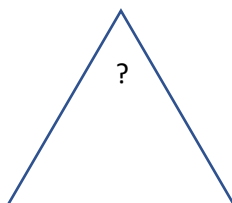
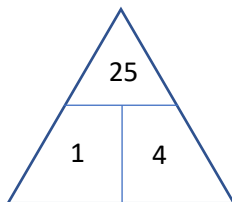
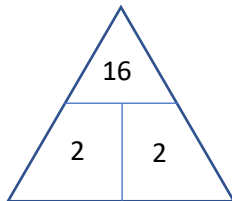


bro

### David's Daily Dilemma

As David can't come in this year to help with maths revision, he has agreed to set you a daily maths challenge. The answers for each week will appear on the website the following Monday.

Here is his third challenge.



Can you work out how the top number is worked out from the bottom two in each triangle?

Can you find the missing number in the third triangle?

3	7
---	---