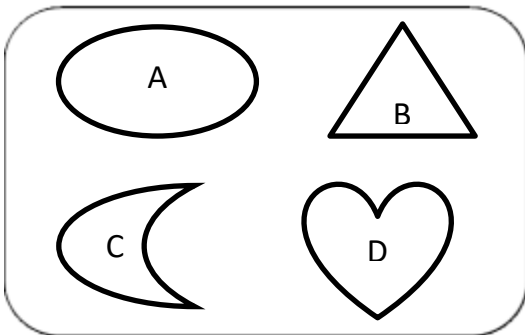


Name: Class:

ODD ONE OUT

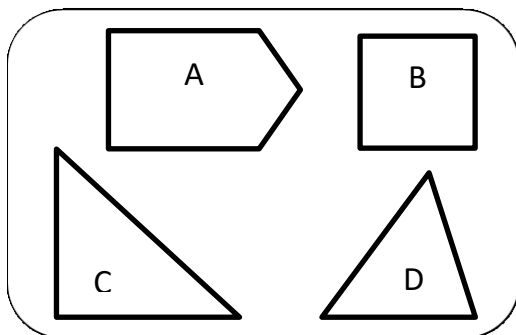
I – Circle the *odd one out shape* in each box and explain why the shape does not belong to the set.

WORD BANK: straight, curved, sides, vertices, types of shape (circle, semi-circle, oval, heart, triangle, quadrilateral, square, rectangle, kite, rhombus, trapezoid, pentagon, hexagon, octagon,...)



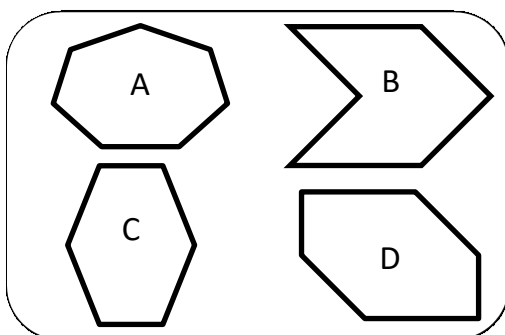
1) Shape doesn't belong to the set
because:

.....
.....



2) Shape doesn't belong to the set
because:


.....
.....



3) Shape doesn't belong to the set
because:

.....
.....

II – Make your own odd one out boxes. Ask your friend to find the odd one out and explain.



.....

.....

.....

.....

.....



.....

.....

.....

.....

.....



.....

.....

.....

.....

.....